








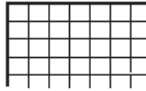



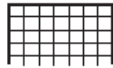




Kun jij samen met Bibi dit raadsel oplossen?

Zoek de waarde van elk voorwerp.



	+		=	6
	+		=	9
	×		=	
	÷		=	
				
				

.....